

# Unit 7 Math Revision

Dear Parents,

On Wednesday the 15<sup>th</sup> of April the Grade 1 students will write a Math test covering the work they have done in Unit7. The marks of this test will count towards their quarter mark for Math. Attached is a work pack to help them prepare for the test. Work through the pack with your child and help him/her if necessary. Regards,

The Grade 1 Team

1. Using tens and ones draw the following numbers:

120

87

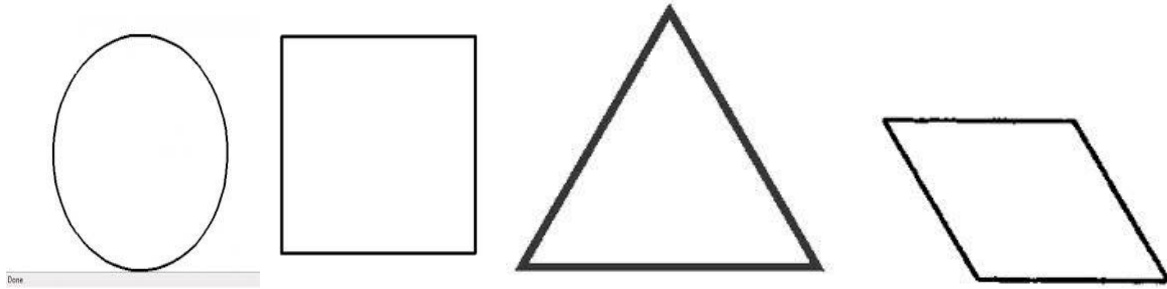
123

2. Circle the tens place

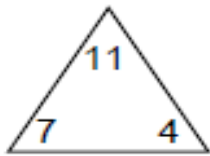
73 45 64 87 45 96 83

3. Colour the triangle yellow. Colour the square red.

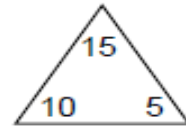
Colour the circle green. Colour the rhombus blue.



6. Complete the Fact Triangles



$$\begin{array}{l} \square + \square = \square \\ \square + \square = \square \\ \square - \square = \square \\ \square - \square = \square \end{array}$$



$$\begin{array}{l} \square + \square = \square \\ \square + \square = \square \\ \square - \square = \square \\ \square - \square = \square \end{array}$$

## 4. Match the digital time to the Analog clock

Name: \_\_\_\_\_

Score: \_\_\_\_\_

### Digital and Analog Clock

Match the digital clock and analog clock that shows the same time.

1)



a)



2)



b)



3)



c)



4)



d)



5)



e)



