

Dear Parents,

On Monday 27th of October the Grade 1 students will write a Math test covering the work they have done in Unit2. The marks of this test will count towards their quarter mark for Math. Attached is a work pack to help them prepare for the test. Work through the pack with your child and help him/her if necessary. The children are allowed to look at a number line or hundred square while completing the assessment so please encourage them to use it at home.

Regards,

The Grade 1 Team

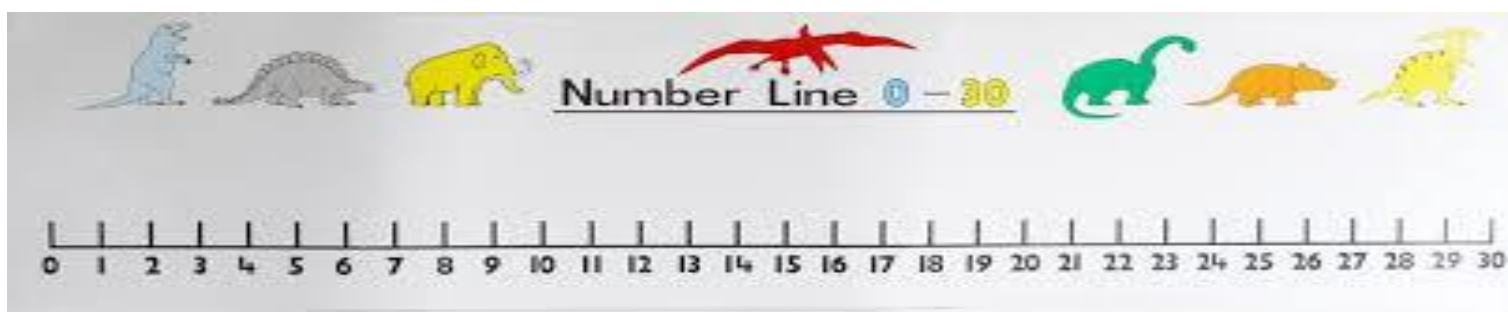
Name: _____

Date: _____

Fill in the missing numbers on the number line.

	2		5					10
		13		15				20
			24				28	

Use your number line to find the number that comes **before**



_____ 21

_____ 25


Write the numbers that come before and after

(A) _____ 22 _____ (B) _____ 31 _____ (C) _____ 19 _____

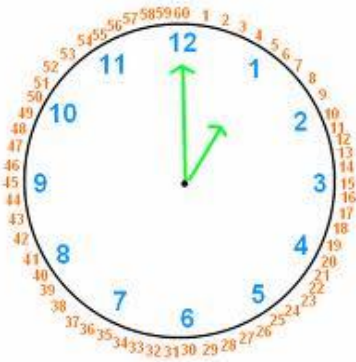
Count on by 2's	2	4				
--------------------	---	---	--	--	--	--

Count on by 5's	10				30	
--------------------	----	--	--	--	----	--

Write the correct time



_____ O'Clock



_____ O'Clock



_____ O'Clock

Make tally mark

s for each number below

12= _____

8= _____

13= _____

13= _____

Story of 10: The children have been learning how to make ten and this will appear on the assessment.

$5+5= \underline{\quad}$

$2+ \underline{\quad}=10$

$7+ \underline{\quad}=10$

$7+ \underline{\quad}=10$

$5+5= \underline{\quad}$

$6+ \underline{\quad}=10$

$6+4= \underline{\quad}$

$9+ \underline{\quad}=10$