

January 18th, 2015

Dear Parents,

On Wednesday January the 21st the grade 1 students will write a Math test covering the work they have done in Unit 4. The marks of this test will count towards their quarter mark for Math. Attached is a work pack to help them prepare for the test. Work through the pack with your child and help him/her if necessary.

Regards,

The Grade 1 Team

Name: \_\_\_\_\_

Date: \_\_\_\_\_

Fill in the missing numbers on the number line.

		43							50
				55					

Draw the missing shapes.



\_\_\_\_\_

How long is this line Segment

\_\_\_\_\_


\_\_\_Inches

Fill in the missing numbers:

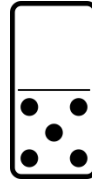
Count on by 2's	40	38				
--------------------	----	----	--	--	--	--

Count on by 2's	10			16		
--------------------	----	--	--	----	--	--


Addition fact:



\_\_\_\_\_ + \_\_\_\_\_ = \_\_\_\_\_

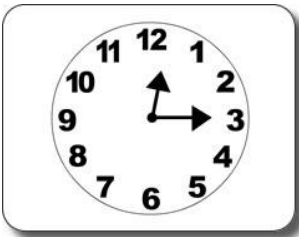


\_\_\_\_\_ + \_\_\_\_\_ = 7



\_\_\_\_\_ + \_\_\_\_\_ = \_\_\_\_\_


What is the time on the clock?



Quarter past 12



\_\_\_\_\_



\_\_\_\_\_

Circle the longer line:

\_\_\_\_\_

\_\_\_\_\_

Add:

3 + 9 = \_\_\_\_\_

6 + 6 = \_\_\_\_\_

7 + 4 = \_\_\_\_\_