

Dear Parents,

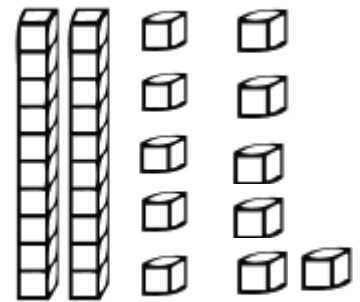
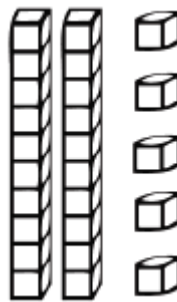
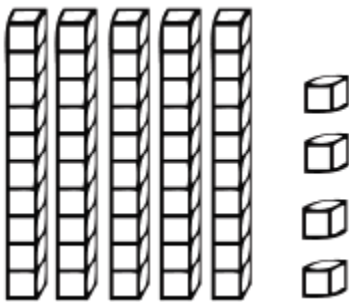
On Monday the 16th of March the grade 1 students will write a Math test covering the work they have done in Unit 6. The marks of this test will count towards their quarter mark for Math. Attached is a work pack to help them prepare for the test. Work through the pack with your child and help him/her if necessary.

Regards,

The Grade 1 Team

Unit 6 Math Revision

1. Write the number. Circle the number in the tens place.



2. Write 5 names for the following numbers.


14
$12 + 2$
$14 - 0$

10
$5 + 5$
$15 - 5$

Subtract. Color the picture using the color code.

3.

Color Code	
0	white
1	brown
2	black
3	green
4	purple
5	orange
6	yellow
7	blue
8	red



4. Write the sums. Draw lines to match turn around facts.

$12 + 2 = \underline{\quad}$

$4 + 3 = \underline{\quad}$

$3 + 4 = \underline{\quad}$

$6 + 7 = \underline{\quad}$

$7 + 6 = \underline{\quad}$

$2 + 12 = \underline{\quad}$

$0 + 8 = \underline{\quad}$

$8 + 0 = \underline{\quad}$


5. Write $<$, $>$, $=$.



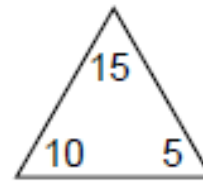
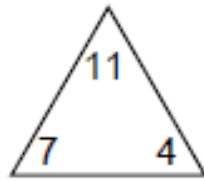
$5 + 3 \square 2$

$9 + 1 \square 12 - 4$

$>$ Greater than	$<$ Less than	$=$ Equal to
$>$ Greater than		
$<$ Less than		
$=$ Equal to		



6.



$$\square + \square = \square$$

$$\square + \square = \square$$

$$\square + \square = \square$$

$$\square + \square = \square$$

$$\square - \square = \square$$

$$\square - \square = \square$$

$$\square - \square = \square$$

$$\square - \square = \square$$