

Name: _____ Date: _____

Dear Parents,

On Wednesday 6th May the students will write a math assessment covering the work they have done throughout Unit 8. Attached is a preparation pack to help your child prepare for the test. Work through the pack with your child and give him/her the necessary support when needed.

Regards,

The Grade 1 Team

Q1. Choose the correct sign: < ; > ; =

$1 + 5 \underline{\hspace{1cm}} 6 - 2$

$5 + 8 \underline{\hspace{1cm}} 6 - 3$

$7 - 0 \underline{\hspace{1cm}} 0 + 7$

$10 + 2 \underline{\hspace{1cm}} 8 - 6$

$13 - 3 \underline{\hspace{1cm}} 2 + 8$

$7 + 5 \underline{\hspace{1cm}} 12$


Q2. Use a drawing to help you answer these questions.

Mariam has 4 cookies. Abdulla has 8 cookies.

Who has more cookies? _____

How many more? _____

Q3. Use the domino to write the fact family




$\underline{\hspace{1cm}} + \underline{\hspace{1cm}} = \underline{\hspace{1cm}}$

$\underline{\hspace{1cm}} + \underline{\hspace{1cm}} = \underline{\hspace{1cm}}$

$\underline{\hspace{1cm}} + \underline{\hspace{1cm}} = \underline{\hspace{1cm}}$

$\underline{\hspace{1cm}} + \underline{\hspace{1cm}} = \underline{\hspace{1cm}}$

Q4. Divide each shape in half



Q5. Mohammed bought 5 lollipops. Each lollipop cost 2 dirhams. How much did Mohammed pay? _____

Q6. Label each equal part into thirds. E.g $\frac{1}{3}$

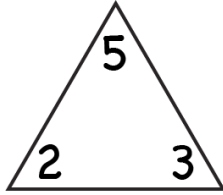


Q7. Label the box and write 3 new names

$3+7$	
$5+5$	

$2+5$	$4+3$

Write four different facts.

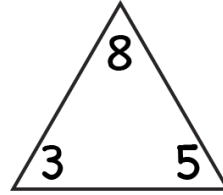


$$\square + \square = \square$$

$$\square + \square = \square$$

$$\square - \square = \square$$

$$\square - \square = \square$$

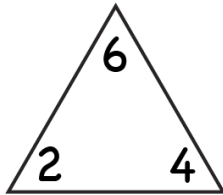


$$\square + \square = \square$$

$$\square + \square = \square$$

$$\square - \square = \square$$

$$\square - \square = \square$$

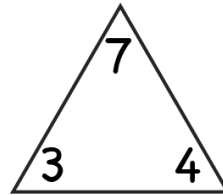


$$\square + \square = \square$$

$$\square + \square = \square$$

$$\square - \square = \square$$

$$\square - \square = \square$$



$$\square + \square = \square$$

$$\square + \square = \square$$

$$\square - \square = \square$$

$$\square - \square = \square$$